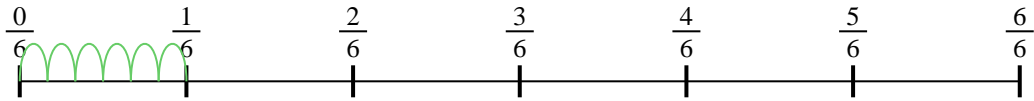




Use the numberline to solve each problem. The first is marked for you.


**Answers**

1)  $\frac{1}{6} \div 6$



1. \_\_\_\_\_

2)  $\frac{1}{5} \div 6$



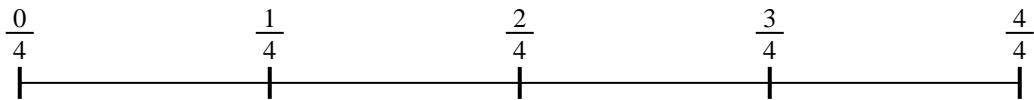
2. \_\_\_\_\_

3)  $\frac{1}{5} \div 2$



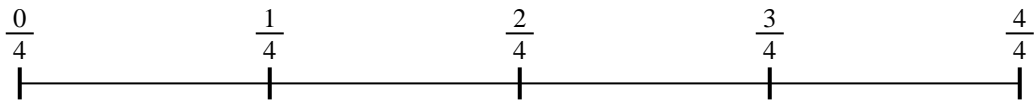
3. \_\_\_\_\_

4)  $\frac{1}{4} \div 5$



4. \_\_\_\_\_

5)  $\frac{1}{4} \div 5$



5. \_\_\_\_\_

6)  $\frac{1}{5} \div 4$



6. \_\_\_\_\_

7)  $\frac{1}{3} \div 2$



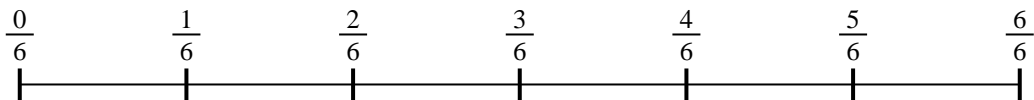
7. \_\_\_\_\_

8)  $\frac{1}{7} \div 6$



8. \_\_\_\_\_

9)  $\frac{1}{6} \div 3$

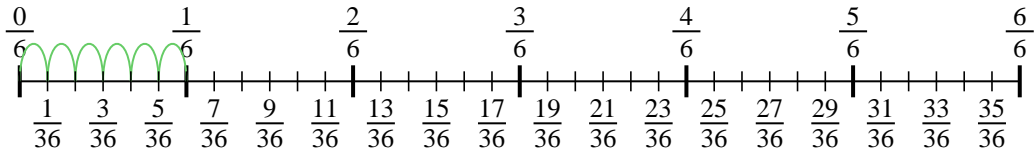


9. \_\_\_\_\_

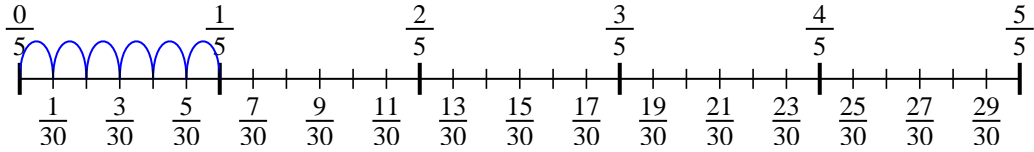


Use the numberline to solve each problem. The first is marked for you.

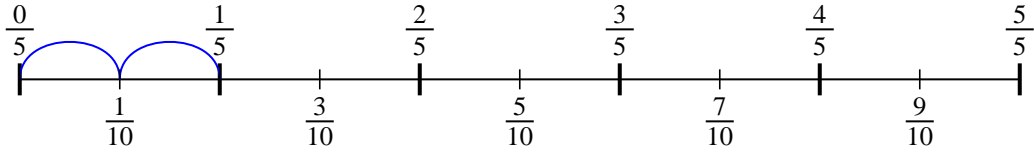
1)  $\frac{1}{6} \div 6$



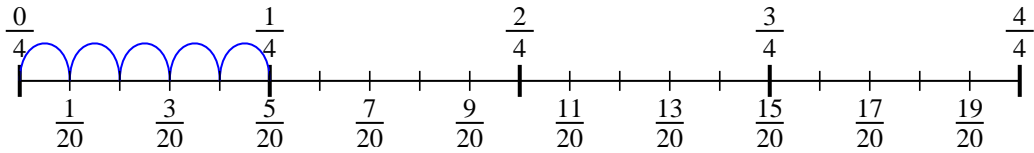
2)  $\frac{1}{5} \div 6$



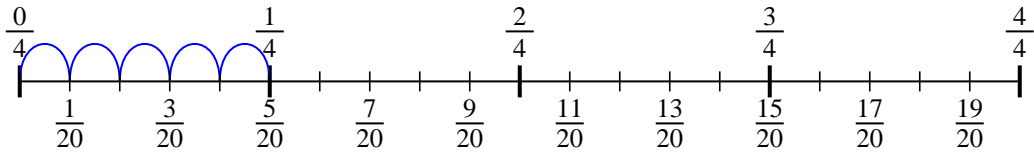
3)  $\frac{1}{5} \div 2$



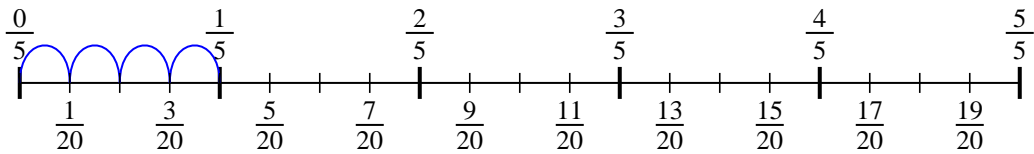
4)  $\frac{1}{4} \div 5$



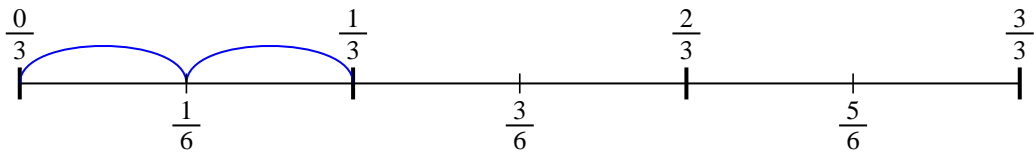
5)  $\frac{1}{4} \div 5$



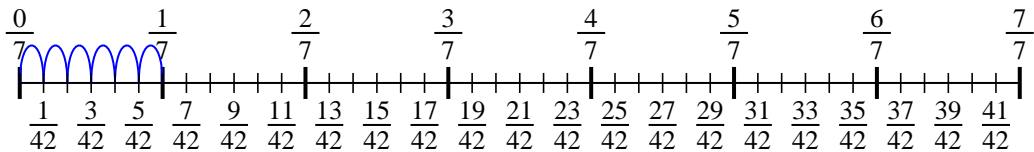
6)  $\frac{1}{5} \div 4$



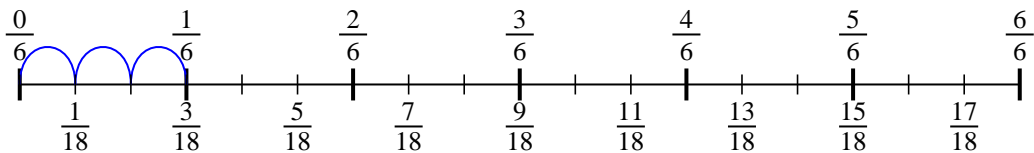
7)  $\frac{1}{3} \div 2$



8)  $\frac{1}{7} \div 6$



9)  $\frac{1}{6} \div 3$



**Answers**

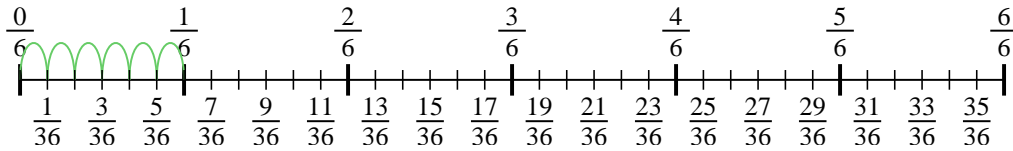
1.  $\frac{1}{36}$
2.  $\frac{1}{30}$
3.  $\frac{1}{10}$
4.  $\frac{1}{20}$
5.  $\frac{1}{20}$
6.  $\frac{1}{20}$
7.  $\frac{1}{6}$
8.  $\frac{1}{42}$
9.  $\frac{1}{18}$



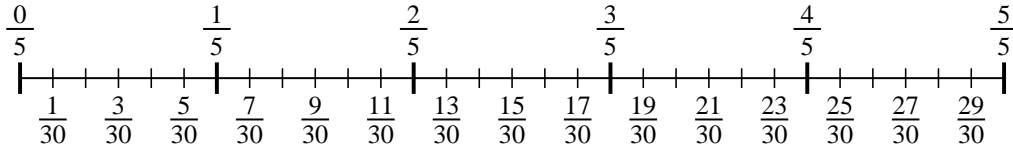
Use the numberline to solve each problem. The first is marked for you.

**Answers**

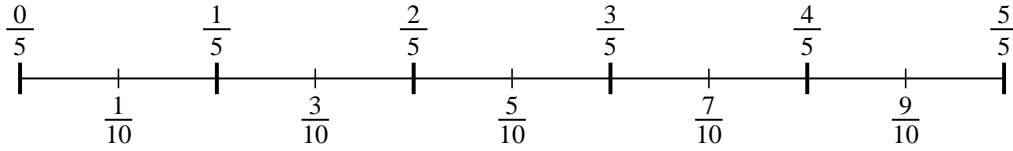
1)  $\frac{1}{6} \div 6$



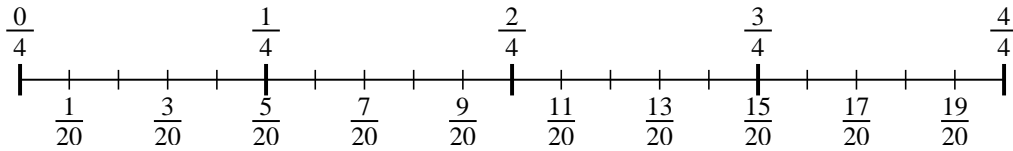
2)  $\frac{1}{5} \div 6$



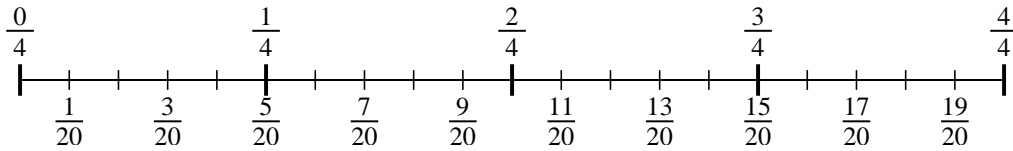
3)  $\frac{1}{5} \div 2$



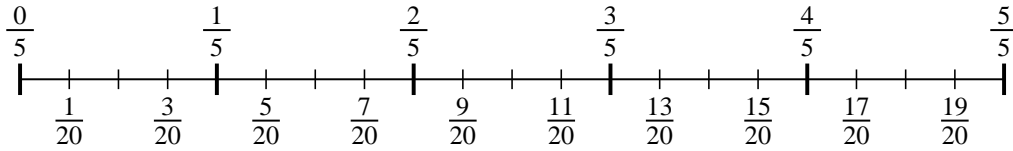
4)  $\frac{1}{4} \div 5$



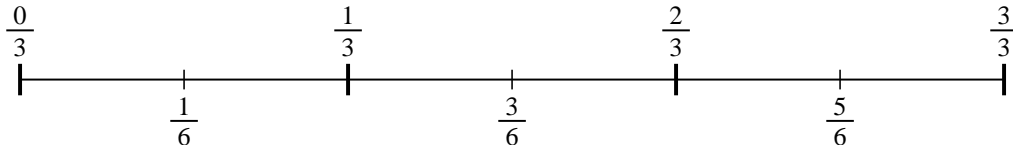
5)  $\frac{1}{4} \div 5$



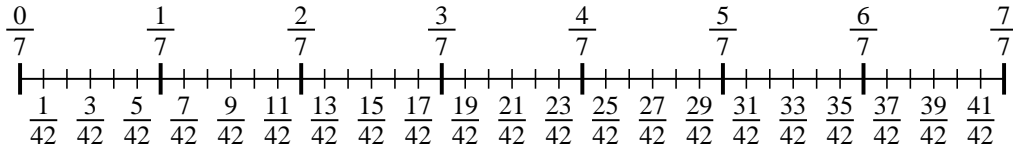
6)  $\frac{1}{5} \div 4$



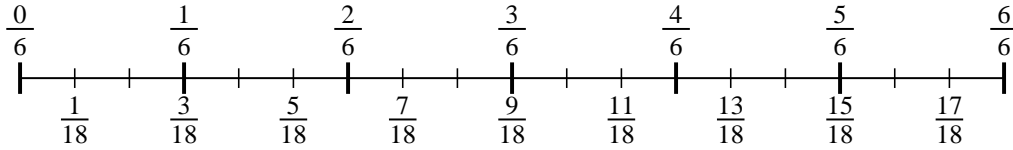
7)  $\frac{1}{3} \div 2$



8)  $\frac{1}{7} \div 6$



9)  $\frac{1}{6} \div 3$



1. \_\_\_\_\_
2. \_\_\_\_\_
3. \_\_\_\_\_
4. \_\_\_\_\_
5. \_\_\_\_\_
6. \_\_\_\_\_
7. \_\_\_\_\_
8. \_\_\_\_\_
9. \_\_\_\_\_